







Homework

Write the start and end times. Then find how much time passed.

Start Time	End Time	How Long Did It Take?
1.  _____ P.M.	 _____ P.M.	_____ hour(s)
2.  _____ A.M.	 _____ A.M.	_____ hour(s)
3.  _____ A.M.	 _____ A.M.	_____ hour(s)

For the activity, ring the unit of time you would use.

4. Bake cookies in an oven.

days seconds minutes months

5. **On the Back** Make a timetable showing how you spend the hours from the time you get home from school to the time you go to sleep.

